




Name these notes:


Name: _____























★ REMEMBER :



TREBLE CLEF LINES =

F	○		Fast	↑
D	○		Drives	
B	○		Bus	
G	○		Green	
E	○		Every	

TREBLE CLEF SPACES =

↑	E	○		☺
	C	○		
	A	○		
	F	○		



BASS CLEF LINES =

A	○		Apples	↑
F	○		Fine	
D	○		Deserve	
B	○		Boys	
G	○		Good	

BASS CLEF SPACES =

↑	G	○		↑	
	E	○			Grass
	C	○			Eat
	A	○			Cows
			All		